



Finding the Area of Quadrilaterals

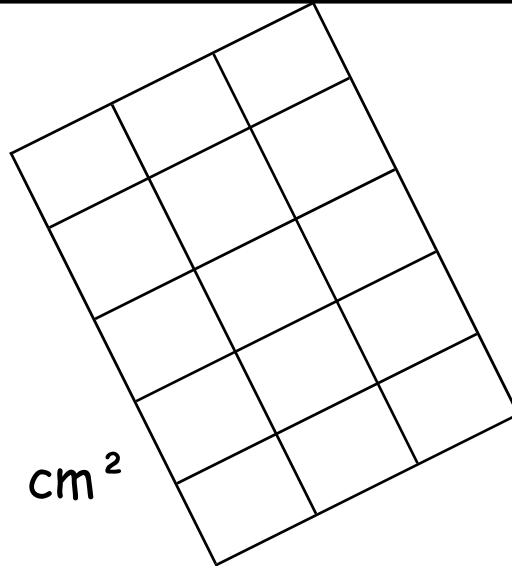
Work out the area of these shapes.

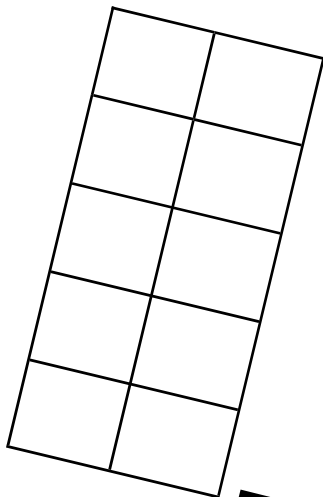
Snakes—write the number in the squares as you count them

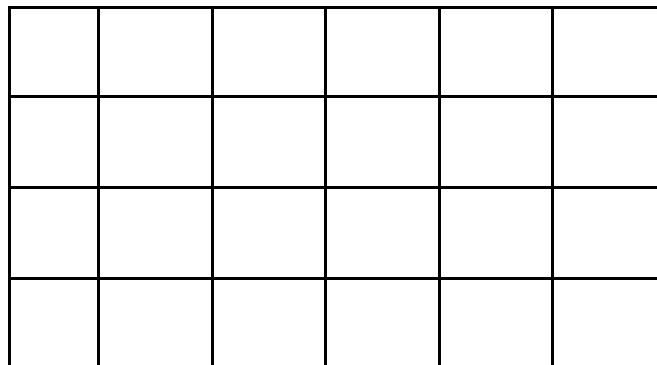
Lions—can you write the total of each row down and then add the totals up?

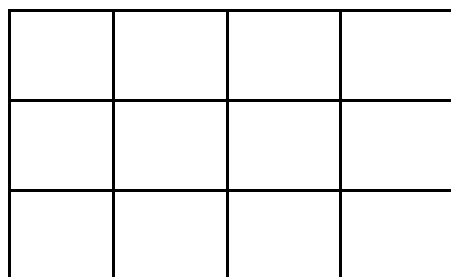
1	2	3

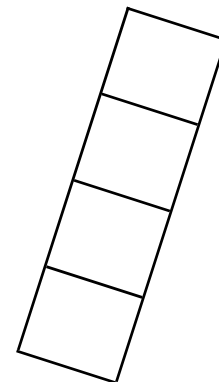
cm²











If you are finished:

- *Check you have written the units of measure correctly
- *Write "square" next to the quadrilateral that is a square
- *Colour the shape with the largest area, blue.
- *Colour the shape with a surface area of 10cm², red.