


🕒 I had \_\_\_\_\_ fruit.

🕒 Is that \_\_\_\_\_ of 16 and 15 correct?

🕒 If we had \_\_\_\_\_ time to spare, we had to work out the \_\_\_\_\_ of 6 and 5.

some	sum
	$\begin{array}{r} 16 \\ +15 \\ \hline 21 \end{array}$


*some/sum*

Resource Shop

🕒 I had \_\_\_\_\_ fruit.

🕒 Is that \_\_\_\_\_ of 16 and 15 correct?

🕒 If we had \_\_\_\_\_ time to spare, we had to work out the \_\_\_\_\_ of 6 and 5.

some	sum
	$\begin{array}{r} 16 \\ +15 \\ \hline 21 \end{array}$


*some/sum*

Resource Shop

🕒 I had \_\_\_\_\_ fruit.

🕒 Is that \_\_\_\_\_ of 16 and 15 correct?

🕒 If we had \_\_\_\_\_ time to spare, we had to work out the \_\_\_\_\_ of 6 and 5.

some	sum
	$\begin{array}{r} 16 \\ +15 \\ \hline 21 \end{array}$


*some/sum*

Resource Shop

🕒 I had \_\_\_\_\_ fruit.

🕒 Is that \_\_\_\_\_ of 16 and 15 correct?

🕒 If we had \_\_\_\_\_ time to spare, we had to work out the \_\_\_\_\_ of 6 and 5.

some	sum
	$\begin{array}{r} 16 \\ +15 \\ \hline 21 \end{array}$


*some/sum*

Resource Shop

🕒 I had \_\_\_\_\_ fruit.

🕒 Is that \_\_\_\_\_ of 16 and 15 correct?

🕒 If we had \_\_\_\_\_ time to spare, we had to work out the \_\_\_\_\_ of 6 and 5.

some	sum
	$\begin{array}{r} 16 \\ +15 \\ \hline 21 \end{array}$


*some/sum*

Resource Shop

🕒 I had \_\_\_\_\_ fruit.

🕒 Is that \_\_\_\_\_ of 16 and 15 correct?

🕒 If we had \_\_\_\_\_ time to spare, we had to work out the \_\_\_\_\_ of 6 and 5.

some	sum
	$\begin{array}{r} 16 \\ +15 \\ \hline 21 \end{array}$


*some/sum*

Resource Shop

🕒 I had \_\_\_\_\_ fruit.

🕒 Is that \_\_\_\_\_ of 16 and 15 correct?

🕒 If we had \_\_\_\_\_ time to spare, we had to work out the \_\_\_\_\_ of 6 and 5.

some	sum
	$\begin{array}{r} 16 \\ +15 \\ \hline 21 \end{array}$


*some/sum*

Resource Shop

🕒 I had \_\_\_\_\_ fruit.

🕒 Is that \_\_\_\_\_ of 16 and 15 correct?

🕒 If we had \_\_\_\_\_ time to spare, we had to work out the \_\_\_\_\_ of 6 and 5.

some	sum
	$\begin{array}{r} 16 \\ +15 \\ \hline 21 \end{array}$


*some/sum*

Resource Shop

🕒 I had \_\_\_\_\_ fruit.

🕒 Is that \_\_\_\_\_ of 16 and 15 correct?

🕒 If we had \_\_\_\_\_ time to spare, we had to work out the \_\_\_\_\_ of 6 and 5.

some	sum
	$\begin{array}{r} 16 \\ +15 \\ \hline 21 \end{array}$


*some/sum*

Resource Shop

🕒 I had \_\_\_\_\_ fruit.

🕒 Is that \_\_\_\_\_ of 16 and 15 correct?

🕒 If we had \_\_\_\_\_ time to spare, we had to work out the \_\_\_\_\_ of 6 and 5.

some	sum
	$\begin{array}{r} 16 \\ +15 \\ \hline 21 \end{array}$

*some/sum*

Resource Shop